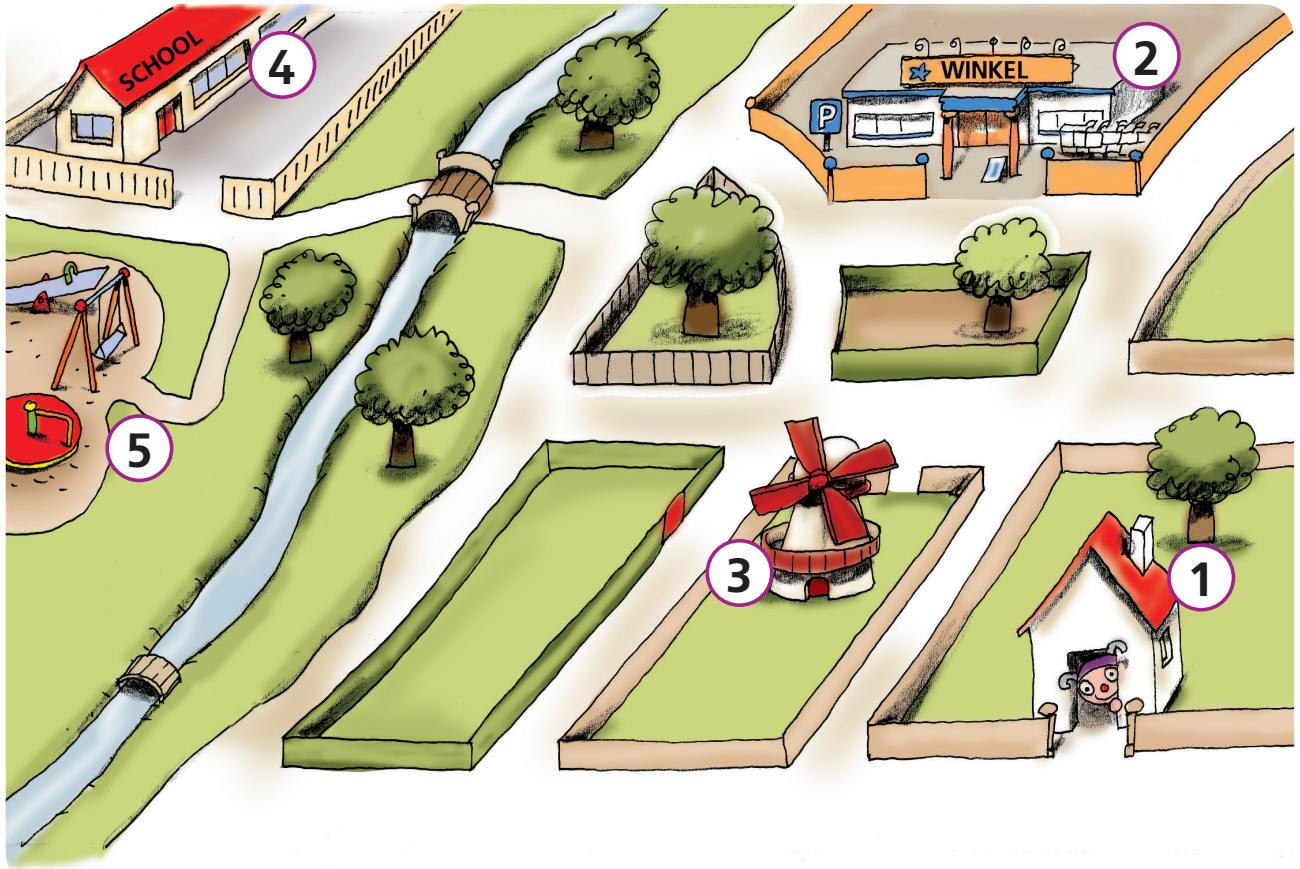



Wat ga je doen?

- een route naar een doel volgen
- vertellen hoe de route loopt door de woorden linksaf, rechtsaf en rechtdoor te gebruiken
- een route kleuren


1 Hoe loopt Wisse? Vertel en kleur.



2 Kleur de mogelijke wegen telkens in een andere kleur.





3 Kleur de kortste weg.



4

Lees en kleur.



van		naar			
van		naar			
van		naar			

5

Kijk naar de dierentuin van oefening 4. Welke is de kortste weg? Kruis aan.



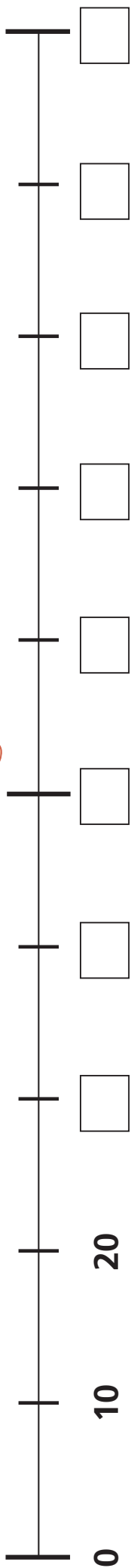
Fleur loopt van  naar  en dan naar  .

Simon loopt van  naar  en dan naar  .

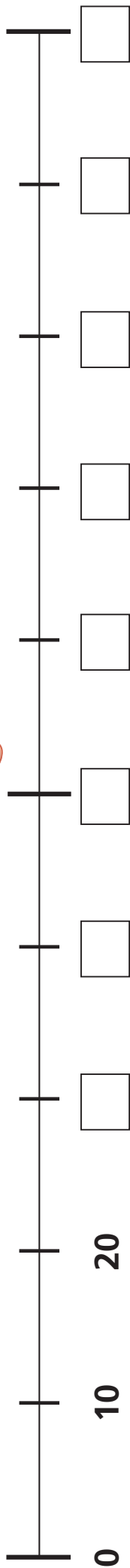
Anke loopt van  naar  en dan naar  .

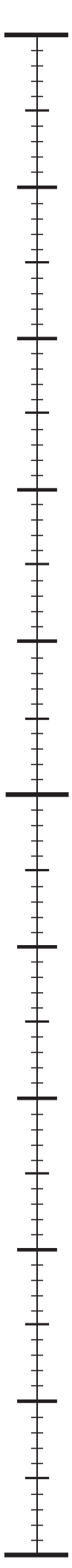
# Wisse springt

Ik doe mee!

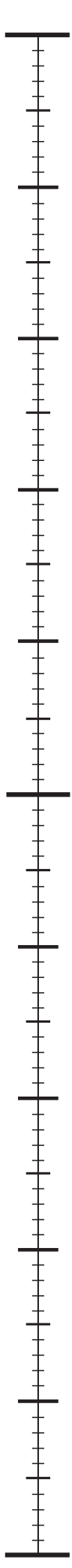


Ik doe mee!

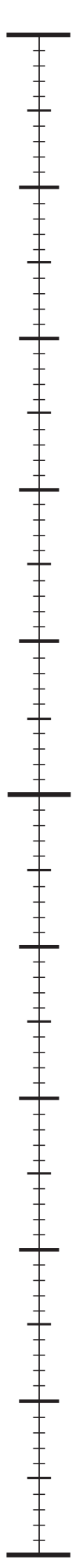




0 10 20 30 40 50 60 70 80 90 100



0 10 20 30 40 50 60 70 80 90 100



0 10 20 30 40 50 60 70 80 90 100



0 10 20 30 40 50 60 70 80 90 100



0 10 20 30 40 50 60 70 80 90 100



0 10 20 30 40 50 60 70 80 90 100



0 10 20 30 40 50 60 70 80 90 100

**Tel je mee?**



**1** **Maak groepen van 10. Kleur de 10-zakken en losse. Vul in.**


--	--	--	--

	los
<b>T</b>	<b>E</b>
□	□
□	




	los
<b>T</b>	<b>E</b>
□	□
□	

**2** **Teken 10-zakken en losse.**



48



84

**3** **Tel en maak vast.**

42

28

26

64

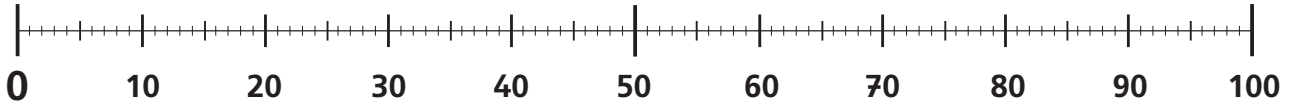
62

24

**Wisse springt**



**1** **Maak vast.**



17

57

71

62

86

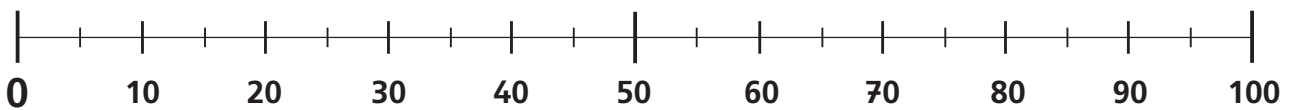
**2** **Vul in.**








**3** **Waar ongeveer? Maak vast.**



19

37

55

91

82

46

28


64

73

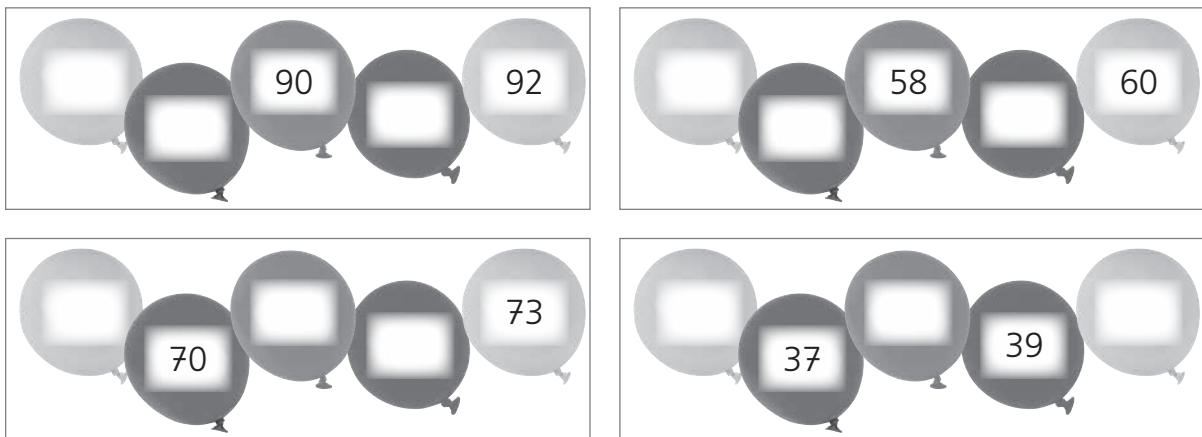




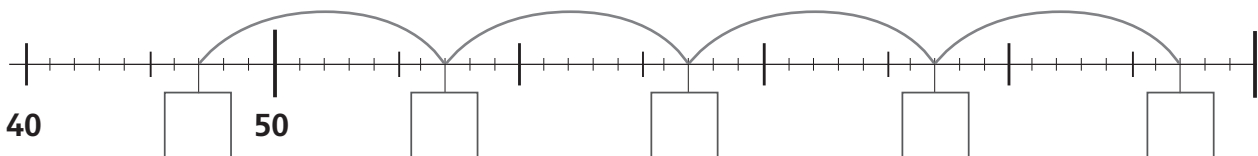
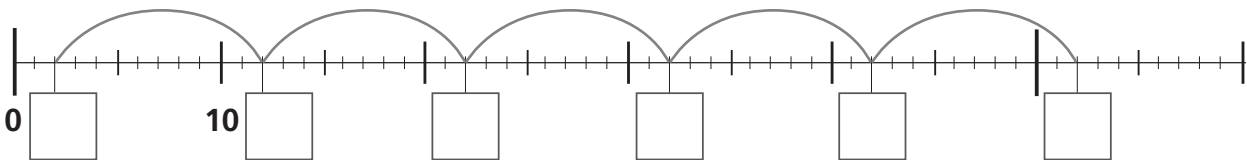
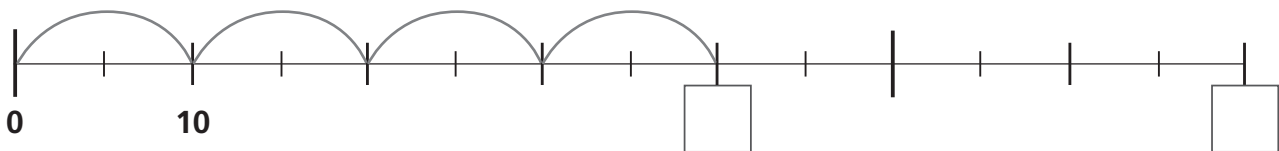
4  Vul in. Tel per 1.



5  Vul in. Tel per 1.



6  Tel met sprongen van 10. Vul in.





# Tempo-oefeningen + en - tot 20

NAAM \_\_\_\_\_

blok 3

DATUM \_\_\_\_\_

$14 + 2 =$	<input type="text"/>
$2 + 18 =$	<input type="text"/>
$19 - 2 =$	<input type="text"/>
$16 - 16 =$	<input type="text"/>
$13 - 10 =$	<input type="text"/>
$12 + 2 =$	<input type="text"/>
$3 + 15 =$	<input type="text"/>
$17 - 2 =$	<input type="text"/>
$17 - 8 =$	<input type="text"/>
$18 - 17 =$	<input type="text"/>
$11 - 9 =$	<input type="text"/>
$14 - 9 =$	<input type="text"/>
$20 - 11 =$	<input type="text"/>
$1 + 1 =$	<input type="text"/>
$7 + 8 =$	<input type="text"/>
$15 - 13 =$	<input type="text"/>
$6 + 13 =$	<input type="text"/>
$3 + 2 =$	<input type="text"/>
$14 - 10 =$	<input type="text"/>
$6 + 6 =$	<input type="text"/>

$18 - 17 =$	<input type="text"/>
$17 - 13 =$	<input type="text"/>
$15 + 3 =$	<input type="text"/>
$12 + 4 =$	<input type="text"/>
$7 + 9 =$	<input type="text"/>
$11 - 5 =$	<input type="text"/>
$10 - 7 =$	<input type="text"/>
$1 + 17 =$	<input type="text"/>
$14 + 3 =$	<input type="text"/>
$1 + 9 =$	<input type="text"/>
$5 + 8 =$	<input type="text"/>
$13 + 4 =$	<input type="text"/>
$5 + 13 =$	<input type="text"/>
$16 - 4 =$	<input type="text"/>
$13 + 5 =$	<input type="text"/>
$20 - 18 =$	<input type="text"/>
$9 - 1 =$	<input type="text"/>
$4 + 8 =$	<input type="text"/>
$13 - 6 =$	<input type="text"/>
$15 - 12 =$	<input type="text"/>

$12 + 7 =$	<input type="text"/>
$18 - 12 =$	<input type="text"/>
$6 - 3 =$	<input type="text"/>
$20 - 18 =$	<input type="text"/>
$8 + 12 =$	<input type="text"/>
$12 - 1 =$	<input type="text"/>
$5 + 5 =$	<input type="text"/>
$11 - 6 =$	<input type="text"/>
$12 + 6 =$	<input type="text"/>
$17 - 10 =$	<input type="text"/>
$13 - 12 =$	<input type="text"/>
$11 + 3 =$	<input type="text"/>
$4 + 2 =$	<input type="text"/>
$20 - 16 =$	<input type="text"/>
$2 + 17 =$	<input type="text"/>
$11 - 3 =$	<input type="text"/>
$11 + 7 =$	<input type="text"/>
$6 - 5 =$	<input type="text"/>
$9 + 9 =$	<input type="text"/>
$4 + 2 =$	<input type="text"/>

We schatten!



0 10 20 30 40 50 60



0 10 20 30 40 50 60



**Metten met de meter**



**1** Schat en maak vast.

korter dan 1 m

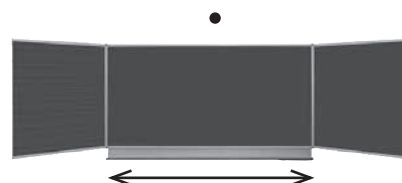
langer dan 1 m



**2** Schat en maak vast.

korter dan 1 halve m


langer dan 1 halve m



# Met Wisse op speurtocht!



**Welk getal ben ik? Lees de rekenzin en vul in.**



# Flitsspel: knipblad 1



$0 + 10$	$10 + 10$	$20 + 20$	$30 + 50$	$40 + 40$
$60 + 40$	$20 + 70$	$30 + 60$	$10 + 90$	$20 + 50$
$60 - 40$	$90 - 50$	$30 - 20$	$50 - 50$	$100 - 50$
$80 - 40$	$20 - 10$	$40 - 20$	$70 - 10$	$60 - 30$
$6 - 4$	$20 - 8$	$4 - 1$	$3 - 3$	$18 - 13$
$17 - 5$	$10 - 5$	$15 - 4$	$20 - 10$	$14 - 12$
$17 - 2$	$15 - 6$	$8 - 3$	$7 - 6$	$15 - 3$
$19 - 18$	$4 - 1$	$20 - 4$	$11 - 2$	$8 - 7$
$19 - 5$	$17 - 6$	$19 - 10$	$16 - 4$	$17 - 12$
$20 - 19$	$20 - 1$	$20 - 17$	$11 - 4$	$13 - 9$

# Flitsspel: achterzijde knipblad 1

80	80	40	20	10
70	100	90	90	100
50	0	10	40	20
30	60	20	10	40
5	0	3	12	2
2	10	11	5	12
12	1	5	9	15
1	9	16	3	1
5	12	9	11	14
4	7	3	19	1

# Flitsspel: knipblad 2



$14 - 13$	$15 - 9$	$11 - 8$	$7 - 4$	$18 - 11$
$18 - 18$	$16 - 7$	$15 - 7$	$16 - 3$	$13 - 10$
$16 + 4$	$2 + 6$	$3 + 2$	$9 + 11$	$15 + 1$
$10 + 8$	$2 + 7$	$14 + 3$	$13 + 5$	$6 + 8$
$9 + 10$	$1 + 4$	$4 + 4$	$16 + 3$	$4 + 5$
$11 + 7$	$3 + 2$	$4 + 13$	$15 + 5$	$2 + 3$
$2 + 11$	$8 + 3$	$2 + 10$	$4 + 3$	$8 + 12$
$19 + 1$	$6 + 5$	$4 + 7$	$12 + 3$	$10 + 2$
$4 + 15$	$6 + 14$	$12 + 5$	$10 + 8$	$5 + 4$
$8 + 8$	$2 + 11$	$4 + 14$	$16 + 3$	$7 + 2$

## Flitsspel: achterzijde knipblad 2

7	3	3	6	1
3	13	8	9	0
16	20	5	8	20
14	18	17	9	18
9	19	8	5	19
5	20	17	5	18
20	7	12	11	13
12	15	11	11	20
9	18	17	20	19
9	19	18	13	16